


Balls and Pots

John threw 3 balls. Each ball went into a pot. More than 1 ball can go in each pot. The numbers on the pots show the points.



Objective:

Know addition facts up to 10.

- ✓ What is the highest score that John can get?
- ✓ Find 3 ways to score 6.
- ✓ Find 3 ways to score 9.
- ✓ What other scores can John get?




Number Crossword

Write the answers to this puzzle in words: ONE, TWO, THREE...

Across:

- 1) 10-6
- 4) 10-5
- 5) 9-1
- 7) 3-3
- 8) 7-5
- 9) 9-2



Down:

- 2) 6-5
- 3) 9-0
- 6) 8-5
- 8) 10-0
- 9) 9-3

Objective:

Use known number facts to subtract mentally.



Pirate's Gold

Captain Silver has some gold bars. He can move one or more at a time.


He made all the piles the same.

He made just two moves.



How did he do it?

Objective:

Explain methods and reasoning.



Pick your Cards



Choose from these four cards to make these totals:

✓ 9

✓ 10

✓ 11

✓ 12

✓ 13

✓ 14

✓ 15

Objective:

Know addition facts and adding 3 numbers



What other totals can you make from these cards?

Let's go Bowling!

Which bowling pins must Anne knock down to score exactly 5?



Objective:

Know addition facts up to 10.



Find 2 different ways:

- ✓ To make 5
- ✓ To make 6
- ✓ To make 7

Lollipops

Alice bought a lollipop. It cost 6c. She paid the correct amount using coins.

Which coins did she use?



Objective:

Know addition facts up to 10.



Objective:

Find total and work out which coins to pay.



There are 5 different ways to do it. Find as many as you can.

What if the lollipop cost 7c?

Adrian ate 12 grapes on Monday, but 4 less on Tuesday.

How many did he eat on Tuesday?

In Miss Jenny's class there are 18 children. 11 are boys.

How many are girls?

Story Sums

Oliver invites 13 friends to his birthday party.

3 friends are abroad, and 2 friends are sick.

How many friends will be at the party?

There were 15 people on a bus. 5 got off.

How many people were left?

At the next stop, 3 more people got on. How many are there now?

When Mary moved to her new house, there were 3 flowers in her garden. She planted 4 more roses and 5 daises.

How many flowers are there now?

Jack and Jill need 12 buckets to build their sand castle. They only have 3.

How many more buckets do they need?

Story Sums

James has 7 pumpkins and Suzie has 2.

How many more pumpkins does James have?

Counting legs!

✓ How many legs do 3 boys, 4 girls and 2 cats have?

✓ How many legs do 5 chickens and 2 pigs have?

I am between zero and 10.



I am more than one.

I am the number before 3.

What am I?

I am less than 10.

I am more than 6.


I am the total of all sides on one  and one .

What am I?

Riddle
Me
Quick

I am less than 9+1.


I am between 6 and 9.

I am .

What am I?

I am between 3 and 9.

I am less than 8.

I am one more than the fingers on one .

What am I?

I am less than 15.

I am not 11.

I am $4 + 4 + 4$.

What am I?

I am more than $2+3$.

I am less than $10-1$.

I am the number of days in a week.

What am I?

Riddle
Me
Quick

I am less than $3+7$.

If you add 2 to me, you will get 10.

What am I?

I am less than 20.

I am a one-digit number.

I rhyme with fix.

What am I?